


Name: _____

Multiplication Tic-Tac-Toe



Solve each multiplication problem. Then, write X or O over the corresponding numbers on the tic-tac-toe board. If you get three in a row, draw a line through it.

$$\begin{array}{r} X \quad 2 \\ \times 5 \\ \hline \end{array}$$

$$\begin{array}{r} O \quad 2 \\ \times 2 \\ \hline \end{array}$$

$$\begin{array}{r} X \quad 2 \\ \times 3 \\ \hline \end{array}$$

2	4	6
8	10	12
14	16	18

$$\begin{array}{r} O \quad 2 \\ \times 4 \\ \hline \end{array}$$

$$\begin{array}{r} X \quad 2 \\ \times 8 \\ \hline \end{array}$$

$$\begin{array}{r} O \quad 2 \\ \times 9 \\ \hline \end{array}$$

$$\begin{array}{r} X \quad 2 \\ \times 7 \\ \hline \end{array}$$

$$\begin{array}{r} O \quad 2 \\ \times 6 \\ \hline \end{array}$$

$$\begin{array}{r} X \quad 2 \\ \times 1 \\ \hline \end{array}$$

$$\begin{array}{r} O \quad 3 \\ \times 6 \\ \hline \end{array}$$

$$\begin{array}{r} X \quad 3 \\ \times 3 \\ \hline \end{array}$$

$$\begin{array}{r} O \quad 3 \\ \times 8 \\ \hline \end{array}$$

3	6	9
12	15	18
21	24	27

$$\begin{array}{r} X \quad 3 \\ \times 5 \\ \hline \end{array}$$

$$\begin{array}{r} O \quad 3 \\ \times 4 \\ \hline \end{array}$$

$$\begin{array}{r} X \quad 3 \\ \times 2 \\ \hline \end{array}$$

$$\begin{array}{r} O \quad 3 \\ \times 7 \\ \hline \end{array}$$

$$\begin{array}{r} X \quad 3 \\ \times 9 \\ \hline \end{array}$$

$$\begin{array}{r} O \quad 3 \\ \times 1 \\ \hline \end{array}$$

$$\begin{array}{r} X \quad 4 \\ \times 3 \\ \hline \end{array}$$

$$\begin{array}{r} O \quad 4 \\ \times 5 \\ \hline \end{array}$$

$$\begin{array}{r} X \quad 4 \\ \times 7 \\ \hline \end{array}$$

4	8	12
16	20	24
28	32	36

$$\begin{array}{r} O \quad 4 \\ \times 1 \\ \hline \end{array}$$

$$\begin{array}{r} X \quad 4 \\ \times 8 \\ \hline \end{array}$$

$$\begin{array}{r} O \quad 4 \\ \times 9 \\ \hline \end{array}$$

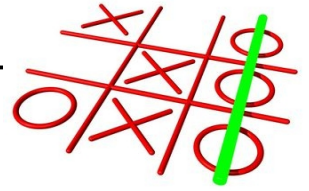
$$\begin{array}{r} X \quad 4 \\ \times 6 \\ \hline \end{array}$$

$$\begin{array}{r} O \quad 4 \\ \times 2 \\ \hline \end{array}$$

$$\begin{array}{r} X \quad 4 \\ \times 4 \\ \hline \end{array}$$

Name: _____

Multiplication Tic-Tac-Toe



Solve each multiplication problem. Then, write X or O over the corresponding numbers on the tic-tac-toe board. If you get three in a row, draw a line through it.

$$\begin{array}{r} 5 \\ X \times 6 \end{array}$$

$$\begin{array}{r} 5 \\ O \times 9 \end{array}$$

$$\begin{array}{r} 5 \\ X \times 7 \end{array}$$

$$\begin{array}{r} 5 \\ O \times 3 \end{array}$$

$$\begin{array}{r} 5 \\ X \times 2 \end{array}$$

$$\begin{array}{r} 5 \\ O \times 4 \end{array}$$

$$\begin{array}{r} 5 \\ X \times 5 \end{array}$$

$$\begin{array}{r} 5 \\ O \times 1 \end{array}$$

$$\begin{array}{r} 5 \\ X \times 8 \end{array}$$

5	10	15
20	25	30
35	40	45

$$\begin{array}{r} 6 \\ O \times 3 \end{array}$$

$$\begin{array}{r} 6 \\ X \times 5 \end{array}$$

$$\begin{array}{r} 6 \\ O \times 6 \end{array}$$

$$\begin{array}{r} 6 \\ X \times 7 \end{array}$$

$$\begin{array}{r} 6 \\ O \times 1 \end{array}$$

$$\begin{array}{r} 6 \\ X \times 8 \end{array}$$

$$\begin{array}{r} 6 \\ O \times 9 \end{array}$$

$$\begin{array}{r} 6 \\ X \times 4 \end{array}$$

$$\begin{array}{r} 6 \\ O \times 2 \end{array}$$

6	12	18
24	30	36
42	48	54

$$\begin{array}{r} 7 \\ X \times 3 \end{array}$$

$$\begin{array}{r} 7 \\ O \times 5 \end{array}$$

$$\begin{array}{r} 7 \\ X \times 6 \end{array}$$

$$\begin{array}{r} 7 \\ O \times 1 \end{array}$$

$$\begin{array}{r} 7 \\ X \times 8 \end{array}$$

$$\begin{array}{r} 7 \\ O \times 7 \end{array}$$

$$\begin{array}{r} 7 \\ X \times 9 \end{array}$$

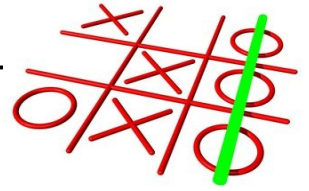
$$\begin{array}{r} 7 \\ O \times 2 \end{array}$$

$$\begin{array}{r} 7 \\ X \times 4 \end{array}$$

7	14	21
28	35	42
49	56	63

Name: _____

Multiplication Tic-Tac-Toe



Solve each multiplication problem. Then, write X or O over the corresponding numbers on the tic-tac-toe board. If you get three in a row, draw a line through it.

$$\begin{array}{r} 8 \\ \times 3 \\ \hline \end{array}$$

$$\begin{array}{r} 8 \\ \times 8 \\ \hline \end{array}$$

$$\begin{array}{r} 8 \\ \times 5 \\ \hline \end{array}$$

$$\begin{array}{r} 8 \\ \times 4 \\ \hline \end{array}$$

$$\begin{array}{r} 8 \\ \times 7 \\ \hline \end{array}$$

$$\begin{array}{r} 8 \\ \times 2 \\ \hline \end{array}$$

$$\begin{array}{r} 8 \\ \times 6 \\ \hline \end{array}$$

$$\begin{array}{r} 8 \\ \times 9 \\ \hline \end{array}$$

$$\begin{array}{r} 8 \\ \times 1 \\ \hline \end{array}$$

8	16	24
32	40	48
56	64	72

$$\begin{array}{r} 9 \\ \times 2 \\ \hline \end{array}$$

$$\begin{array}{r} 9 \\ \times 5 \\ \hline \end{array}$$

$$\begin{array}{r} 9 \\ \times 8 \\ \hline \end{array}$$

$$\begin{array}{r} 9 \\ \times 6 \\ \hline \end{array}$$

$$\begin{array}{r} 9 \\ \times 1 \\ \hline \end{array}$$

$$\begin{array}{r} 9 \\ \times 9 \\ \hline \end{array}$$

$$\begin{array}{r} 9 \\ \times 4 \\ \hline \end{array}$$

$$\begin{array}{r} 9 \\ \times 7 \\ \hline \end{array}$$

$$\begin{array}{r} 9 \\ \times 3 \\ \hline \end{array}$$

9	18	27
36	45	54
63	72	81

$$\begin{array}{r} 10 \\ \times 6 \\ \hline \end{array}$$

$$\begin{array}{r} 10 \\ \times 1 \\ \hline \end{array}$$

$$\begin{array}{r} 10 \\ \times 2 \\ \hline \end{array}$$

$$\begin{array}{r} 10 \\ \times 5 \\ \hline \end{array}$$

$$\begin{array}{r} 10 \\ \times 8 \\ \hline \end{array}$$

$$\begin{array}{r} 10 \\ \times 3 \\ \hline \end{array}$$

$$\begin{array}{r} 10 \\ \times 7 \\ \hline \end{array}$$

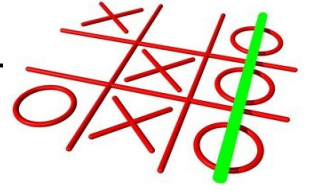
$$\begin{array}{r} 10 \\ \times 4 \\ \hline \end{array}$$

$$\begin{array}{r} 10 \\ \times 9 \\ \hline \end{array}$$

10	20	30
40	50	60
70	80	90

Name: _____

Multiplication Tic-Tac-Toe



Solve each multiplication problem. Then, write X or O over the corresponding numbers on the tic-tac-toe board. If you get three in a row, draw a line through it.

$$\begin{array}{r} X \quad 11 \\ \times 8 \\ \hline \end{array}$$

$$\begin{array}{r} O \quad 11 \\ \times 1 \\ \hline \end{array}$$

$$\begin{array}{r} X \quad 11 \\ \times 5 \\ \hline \end{array}$$

$$\begin{array}{r} O \quad 11 \\ \times 6 \\ \hline \end{array}$$

$$\begin{array}{r} X \quad 11 \\ \times 3 \\ \hline \end{array}$$

$$\begin{array}{r} O \quad 11 \\ \times 7 \\ \hline \end{array}$$

$$\begin{array}{r} X \quad 11 \\ \times 4 \\ \hline \end{array}$$

$$\begin{array}{r} O \quad 11 \\ \times 9 \\ \hline \end{array}$$

$$\begin{array}{r} X \quad 11 \\ \times 2 \\ \hline \end{array}$$

11	22	33
44	55	66
77	88	99

$$\begin{array}{r} O \quad 12 \\ \times 9 \\ \hline \end{array}$$

$$\begin{array}{r} X \quad 12 \\ \times 4 \\ \hline \end{array}$$

$$\begin{array}{r} O \quad 12 \\ \times 5 \\ \hline \end{array}$$

$$\begin{array}{r} X \quad 12 \\ \times 2 \\ \hline \end{array}$$

$$\begin{array}{r} O \quad 12 \\ \times 7 \\ \hline \end{array}$$

$$\begin{array}{r} X \quad 12 \\ \times 8 \\ \hline \end{array}$$

$$\begin{array}{r} O \quad 12 \\ \times 6 \\ \hline \end{array}$$

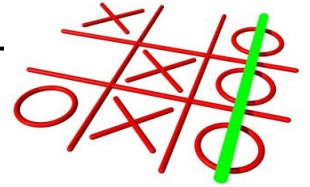
$$\begin{array}{r} X \quad 12 \\ \times 3 \\ \hline \end{array}$$

$$\begin{array}{r} O \quad 12 \\ \times 1 \\ \hline \end{array}$$

12	24	36
48	60	72
84	96	108

ANSWER KEY 1

Multiplication Tic-Tac-Toe



Solve each multiplication problem. Then, write X or O over the corresponding numbers on the tic-tac-toe board. If you get three in a row, draw a line through it.

$$\begin{array}{r} \text{X} \\ \times 5 \\ \hline 10 \end{array}$$

$$\begin{array}{r} \text{O} \\ \times 2 \\ \hline 4 \end{array}$$

$$\begin{array}{r} \text{X} \\ \times 3 \\ \hline 6 \end{array}$$

$$\begin{array}{r} \text{O} \\ \times 4 \\ \hline 8 \end{array}$$

$$\begin{array}{r} \text{X} \\ \times 8 \\ \hline 16 \end{array}$$

$$\begin{array}{r} \text{O} \\ \times 9 \\ \hline 18 \end{array}$$

$$\begin{array}{r} \text{X} \\ \times 7 \\ \hline 14 \end{array}$$

$$\begin{array}{r} \text{O} \\ \times 6 \\ \hline 12 \end{array}$$

$$\begin{array}{r} \text{X} \\ \times 1 \\ \hline 2 \end{array}$$

<u>X</u> 2	<u>O</u> 4	<u>X</u> 6
<u>O</u> 8	<u>X</u> 10	<u>O</u> 12
<u>X</u> 14	<u>X</u> 16	<u>O</u> 18

$$\begin{array}{r} \text{O} \\ \times 6 \\ \hline 18 \end{array}$$

$$\begin{array}{r} \text{X} \\ \times 3 \\ \hline 9 \end{array}$$

$$\begin{array}{r} \text{O} \\ \times 8 \\ \hline 24 \end{array}$$

$$\begin{array}{r} \text{X} \\ \times 5 \\ \hline 15 \end{array}$$

$$\begin{array}{r} \text{O} \\ \times 4 \\ \hline 12 \end{array}$$

$$\begin{array}{r} \text{X} \\ \times 2 \\ \hline 6 \end{array}$$

$$\begin{array}{r} \text{O} \\ \times 7 \\ \hline 21 \end{array}$$

$$\begin{array}{r} \text{X} \\ \times 9 \\ \hline 27 \end{array}$$

$$\begin{array}{r} \text{O} \\ \times 1 \\ \hline 3 \end{array}$$

<u>O</u> 3	<u>X</u> 6	<u>X</u> 9
<u>O</u> 12	<u>X</u> 15	<u>O</u> 18
<u>O</u> 21	<u>O</u> 24	<u>X</u> 27

$$\begin{array}{r} \text{X} \\ \times 3 \\ \hline 12 \end{array}$$

$$\begin{array}{r} \text{O} \\ \times 5 \\ \hline 20 \end{array}$$

$$\begin{array}{r} \text{X} \\ \times 7 \\ \hline 28 \end{array}$$

$$\begin{array}{r} \text{O} \\ \times 1 \\ \hline 4 \end{array}$$

$$\begin{array}{r} \text{X} \\ \times 8 \\ \hline 32 \end{array}$$

$$\begin{array}{r} \text{O} \\ \times 9 \\ \hline 36 \end{array}$$

$$\begin{array}{r} \text{X} \\ \times 6 \\ \hline 24 \end{array}$$

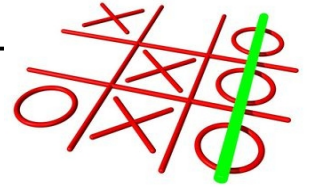
$$\begin{array}{r} \text{O} \\ \times 2 \\ \hline 8 \end{array}$$

$$\begin{array}{r} \text{X} \\ \times 4 \\ \hline 16 \end{array}$$

<u>O</u> 4	<u>O</u> 8	<u>X</u> 12
<u>X</u> 16	<u>O</u> 20	<u>X</u> 24
<u>X</u> 28	<u>X</u> 32	<u>O</u> 36

ANSWER KEY 2

Multiplication Tic-Tac-Toe



Solve each multiplication problem. Then, write X or O over the corresponding numbers on the tic-tac-toe board. If you get three in a row, draw a line through it.

$$\begin{array}{r} 5 \\ X \times 6 \\ \hline 30 \end{array}$$

$$\begin{array}{r} 5 \\ O \times 9 \\ \hline 45 \end{array}$$

$$\begin{array}{r} 5 \\ X \times 7 \\ \hline 35 \end{array}$$

$$\begin{array}{r} 5 \\ O \times 3 \\ \hline 15 \end{array}$$

$$\begin{array}{r} 5 \\ X \times 2 \\ \hline 10 \end{array}$$

$$\begin{array}{r} 5 \\ O \times 4 \\ \hline 20 \end{array}$$

$$\begin{array}{r} 5 \\ X \times 5 \\ \hline 25 \end{array}$$

$$\begin{array}{r} 5 \\ O \times 1 \\ \hline 5 \end{array}$$

$$\begin{array}{r} 5 \\ X \times 8 \\ \hline 40 \end{array}$$

<u>O</u> 5	<u>X</u> 10	<u>O</u> 15
<u>O</u> 20	<u>X</u> 25	<u>X</u> 30
<u>X</u> 35	<u>X</u> 40	<u>O</u> 45

$$\begin{array}{r} 6 \\ O \times 3 \\ \hline 18 \end{array}$$

$$\begin{array}{r} 6 \\ X \times 5 \\ \hline 30 \end{array}$$

$$\begin{array}{r} 6 \\ O \times 6 \\ \hline 36 \end{array}$$

$$\begin{array}{r} 6 \\ X \times 7 \\ \hline 42 \end{array}$$

$$\begin{array}{r} 6 \\ O \times 1 \\ \hline 6 \end{array}$$

$$\begin{array}{r} 6 \\ X \times 8 \\ \hline 48 \end{array}$$

$$\begin{array}{r} 6 \\ O \times 9 \\ \hline 54 \end{array}$$

$$\begin{array}{r} 6 \\ X \times 4 \\ \hline 24 \end{array}$$

$$\begin{array}{r} 6 \\ O \times 2 \\ \hline 12 \end{array}$$

<u>O</u> 6	<u>O</u> 12	<u>O</u> 18
<u>X</u> 24	<u>X</u> 30	<u>O</u> 36
<u>X</u> 42	<u>X</u> 48	<u>O</u> 54

$$\begin{array}{r} 7 \\ X \times 3 \\ \hline 21 \end{array}$$

$$\begin{array}{r} 7 \\ O \times 5 \\ \hline 35 \end{array}$$

$$\begin{array}{r} 7 \\ X \times 6 \\ \hline 42 \end{array}$$

$$\begin{array}{r} 7 \\ O \times 1 \\ \hline 7 \end{array}$$

$$\begin{array}{r} 7 \\ X \times 8 \\ \hline 56 \end{array}$$

$$\begin{array}{r} 7 \\ O \times 7 \\ \hline 49 \end{array}$$

$$\begin{array}{r} 7 \\ X \times 9 \\ \hline 63 \end{array}$$

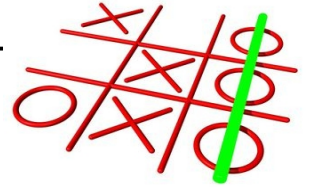
$$\begin{array}{r} 7 \\ O \times 2 \\ \hline 14 \end{array}$$

$$\begin{array}{r} 7 \\ X \times 4 \\ \hline 28 \end{array}$$

<u>O</u> 7	<u>O</u> 14	<u>X</u> 21
<u>X</u> 28	<u>O</u> 35	<u>X</u> 42
<u>O</u> 49	<u>X</u> 56	<u>X</u> 63

ANSWER KEY 3

Multiplication Tic-Tac-Toe



Solve each multiplication problem. Then, write X or O over the corresponding numbers on the tic-tac-toe board. If you get three in a row, draw a line through it.

$$\text{O } \begin{array}{r} 8 \\ \times 3 \\ \hline 24 \end{array}$$

$$\text{X } \begin{array}{r} 8 \\ \times 8 \\ \hline 64 \end{array}$$

$$\text{O } \begin{array}{r} 8 \\ \times 5 \\ \hline 40 \end{array}$$

<u>O</u> 8	<u>X</u> 16	<u>O</u> 24
<u>X</u> 32	<u>O</u> 40	<u>O</u> 48
<u>O</u> 56	<u>X</u> 64	<u>X</u> 72

$$\text{X } \begin{array}{r} 8 \\ \times 4 \\ \hline 32 \end{array}$$

$$\text{O } \begin{array}{r} 8 \\ \times 7 \\ \hline 56 \end{array}$$

$$\text{X } \begin{array}{r} 8 \\ \times 2 \\ \hline 16 \end{array}$$

$$\text{O } \begin{array}{r} 8 \\ \times 6 \\ \hline 48 \end{array}$$

$$\text{X } \begin{array}{r} 8 \\ \times 9 \\ \hline 72 \end{array}$$

$$\text{O } \begin{array}{r} 8 \\ \times 1 \\ \hline 8 \end{array}$$

$$\text{X } \begin{array}{r} 9 \\ \times 2 \\ \hline 18 \end{array}$$

$$\text{O } \begin{array}{r} 9 \\ \times 5 \\ \hline 45 \end{array}$$

$$\text{X } \begin{array}{r} 9 \\ \times 8 \\ \hline 72 \end{array}$$

<u>X</u> 9	<u>X</u> 18	<u>X</u> 27
<u>X</u> 36	<u>O</u> 45	<u>O</u> 54
<u>O</u> 63	<u>X</u> 72	<u>O</u> 81

$$\text{O } \begin{array}{r} 9 \\ \times 6 \\ \hline 54 \end{array}$$

$$\text{X } \begin{array}{r} 9 \\ \times 1 \\ \hline 9 \end{array}$$

$$\text{O } \begin{array}{r} 9 \\ \times 9 \\ \hline 81 \end{array}$$

$$\text{X } \begin{array}{r} 9 \\ \times 4 \\ \hline 36 \end{array}$$

$$\text{O } \begin{array}{r} 9 \\ \times 7 \\ \hline 63 \end{array}$$

$$\text{X } \begin{array}{r} 9 \\ \times 3 \\ \hline 27 \end{array}$$

$$\text{O } \begin{array}{r} 10 \\ \times 6 \\ \hline 60 \end{array}$$

$$\text{X } \begin{array}{r} 10 \\ \times 1 \\ \hline 10 \end{array}$$

$$\text{O } \begin{array}{r} 10 \\ \times 2 \\ \hline 20 \end{array}$$

<u>X</u> 10	<u>O</u> 20	<u>X</u> 30
<u>X</u> 40	<u>X</u> 50	<u>O</u> 60
<u>O</u> 70	<u>O</u> 80	<u>O</u> 90

$$\text{X } \begin{array}{r} 10 \\ \times 5 \\ \hline 50 \end{array}$$

$$\text{O } \begin{array}{r} 10 \\ \times 8 \\ \hline 80 \end{array}$$

$$\text{X } \begin{array}{r} 10 \\ \times 3 \\ \hline 30 \end{array}$$

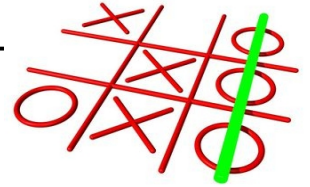
$$\text{O } \begin{array}{r} 10 \\ \times 7 \\ \hline 70 \end{array}$$

$$\text{X } \begin{array}{r} 10 \\ \times 4 \\ \hline 40 \end{array}$$

$$\text{O } \begin{array}{r} 10 \\ \times 9 \\ \hline 90 \end{array}$$

ANSWER KEY 4

Multiplication Tic-Tac-Toe



Solve each multiplication problem. Then, write X or O over the corresponding numbers on the tic-tac-toe board. If you get three in a row, draw a line through it.

$$\begin{array}{r} 11 \\ \times 8 \\ \hline 88 \end{array}$$

$$\begin{array}{r} 11 \\ \times 1 \\ \hline 11 \end{array}$$

$$\begin{array}{r} 11 \\ \times 5 \\ \hline 55 \end{array}$$

$$\begin{array}{r} 11 \\ \times 6 \\ \hline 66 \end{array}$$

$$\begin{array}{r} 11 \\ \times 3 \\ \hline 33 \end{array}$$

$$\begin{array}{r} 11 \\ \times 7 \\ \hline 77 \end{array}$$

$$\begin{array}{r} 11 \\ \times 4 \\ \hline 44 \end{array}$$

$$\begin{array}{r} 11 \\ \times 9 \\ \hline 99 \end{array}$$

$$\begin{array}{r} 11 \\ \times 2 \\ \hline 22 \end{array}$$

<u>O</u> ₁₁	<u>X</u> ₂₂	<u>X</u> ₃₃
<u>X</u> ₄₄	<u>X</u> ₅₅	<u>O</u> ₆₆
<u>O</u> ₇₇	<u>X</u> ₈₈	<u>O</u> ₉₉

$$\begin{array}{r} 12 \\ \times 9 \\ \hline 108 \end{array}$$

$$\begin{array}{r} 12 \\ \times 4 \\ \hline 48 \end{array}$$

$$\begin{array}{r} 12 \\ \times 5 \\ \hline 60 \end{array}$$

$$\begin{array}{r} 12 \\ \times 2 \\ \hline 24 \end{array}$$

$$\begin{array}{r} 12 \\ \times 7 \\ \hline 84 \end{array}$$

$$\begin{array}{r} 12 \\ \times 8 \\ \hline 96 \end{array}$$

$$\begin{array}{r} 12 \\ \times 6 \\ \hline 72 \end{array}$$

$$\begin{array}{r} 12 \\ \times 3 \\ \hline 36 \end{array}$$

$$\begin{array}{r} 12 \\ \times 1 \\ \hline 12 \end{array}$$

<u>O</u> ₁₂	<u>X</u> ₂₄	<u>X</u> ₃₆
<u>X</u> ₄₈	<u>O</u> ₆₀	<u>O</u> ₇₂
<u>O</u> ₈₄	<u>X</u> ₉₆	<u>O</u> ₁₀₈